

# Cuaderno de actividades

## ACTIVIDADES DE MATEMÁTICAS

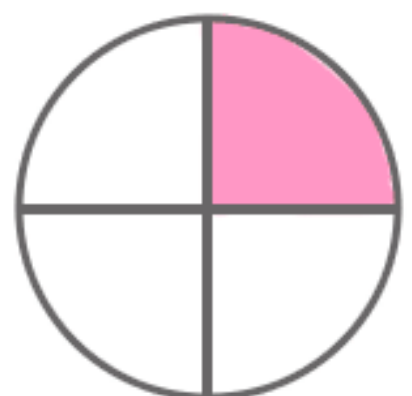
8



$$\frac{1}{2}$$



$$\frac{1}{3}$$




$$\frac{1}{4}$$

Fracciones

.....  
Este cuaderno es gratuito, consigue más en [www.edufichas.com](http://www.edufichas.com)  
.....

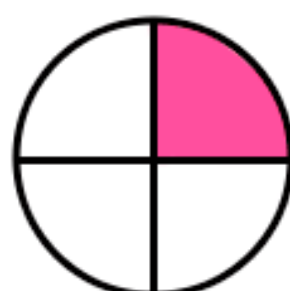
*gracias*



$$\frac{1}{2}$$

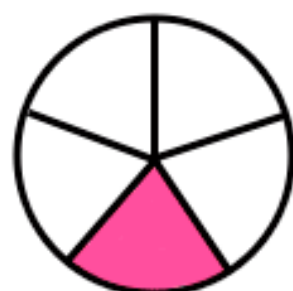


$$\frac{1}{3}$$



$$\frac{1}{4}$$

edufichas.com



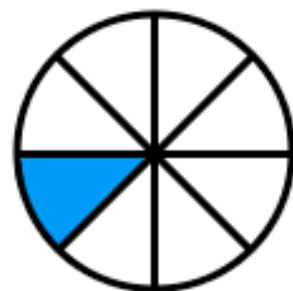
$$\frac{1}{5}$$



$$\frac{1}{6}$$



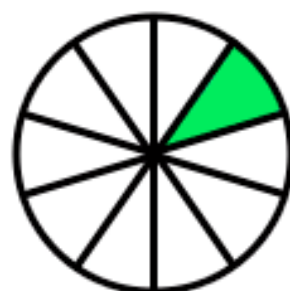
$$\frac{1}{7}$$



$$\frac{1}{8}$$




$$\frac{1}{9}$$



$$\frac{1}{10}$$

Nombre: \_\_\_\_\_ Curso: \_\_\_\_\_ Fecha: \_\_\_\_\_

# Fracciones



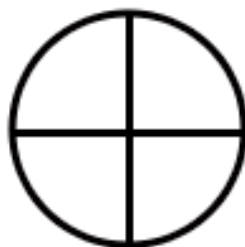
$$\frac{1}{2}$$



$$\frac{1}{3}$$



$$\frac{3}{6}$$



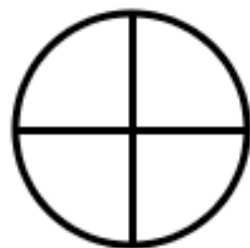
$$\frac{2}{4}$$



$$\frac{2}{5}$$



$$\frac{5}{6}$$



$$\frac{3}{4}$$



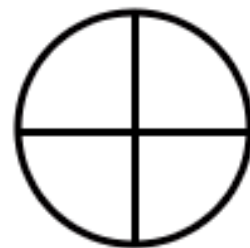
$$\frac{3}{5}$$



$$\frac{2}{3}$$



$$\frac{4}{6}$$



$$\frac{1}{4}$$

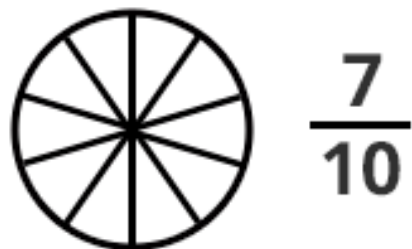
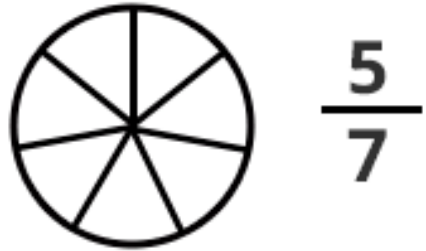
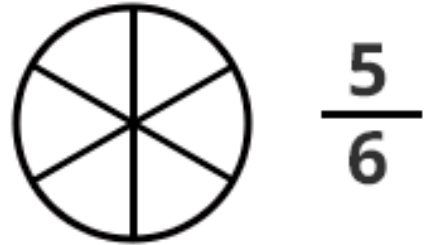
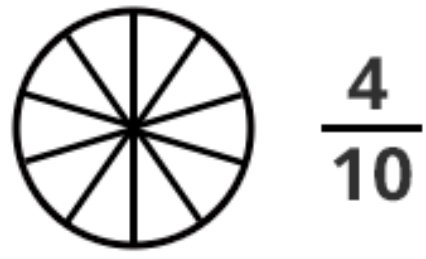
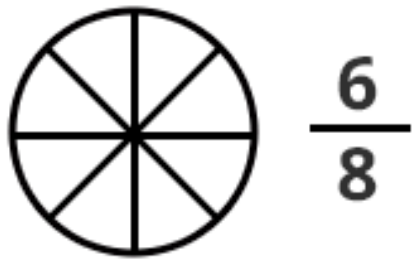


$$\frac{4}{5}$$

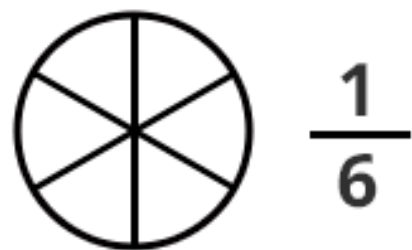
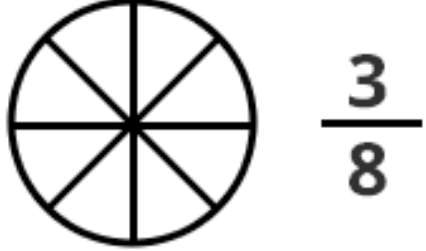
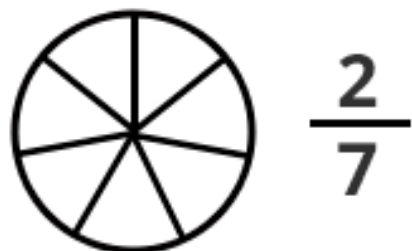
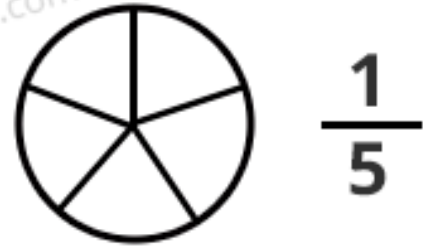
edufichas.com

Nombre: \_\_\_\_\_ Curso: \_\_\_\_\_ Fecha: \_\_\_\_\_

# Fracciones



edufichas.com



Nombre: \_\_\_\_\_ Curso: \_\_\_\_\_ Fecha: \_\_\_\_\_

# Fracciones



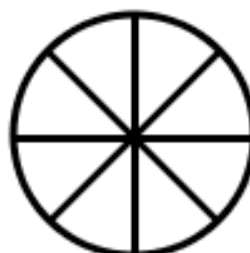
$$\frac{2}{8}$$



$$\frac{1}{5}$$



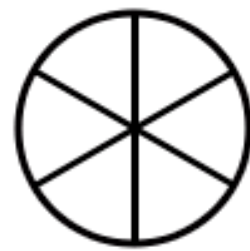
$$\frac{4}{7}$$



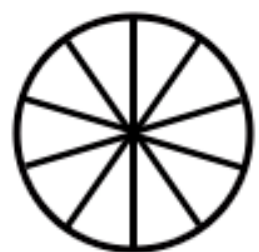
$$\frac{5}{8}$$




$$\frac{5}{7}$$



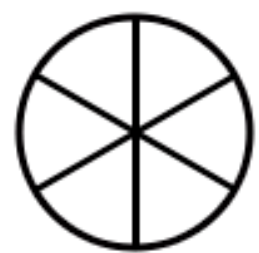
$$\frac{4}{6}$$



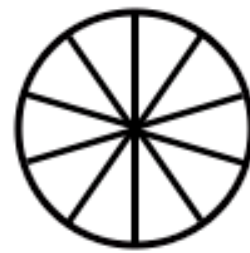
$$\frac{3}{10}$$



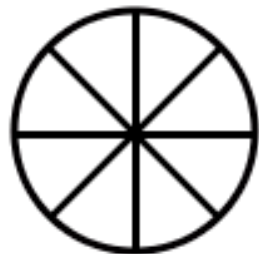
$$\frac{1}{4}$$



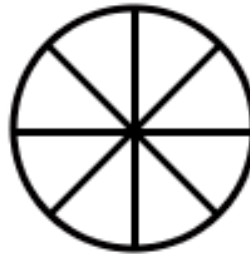
$$\frac{1}{6}$$



$$\frac{9}{10}$$



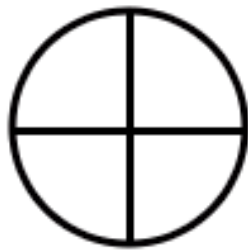
$$\frac{7}{8}$$



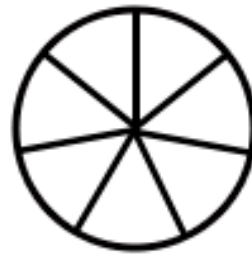
$$\frac{6}{8}$$

Nombre: \_\_\_\_\_ Curso: \_\_\_\_\_ Fecha: \_\_\_\_\_

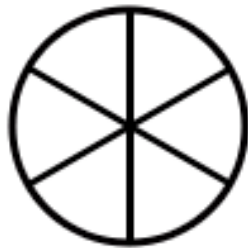
# Fracciones



$$\frac{2}{4}$$



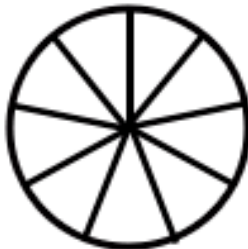
$$\frac{1}{7}$$



$$\frac{5}{6}$$



$$\frac{3}{5}$$



$$\frac{5}{9}$$



$$\frac{7}{8}$$



$$\frac{1}{3}$$



$$\frac{1}{2}$$



$$\frac{2}{7}$$



$$\frac{8}{9}$$



$$\frac{1}{5}$$



$$\frac{6}{6}$$

edufichas.com

<https://www.edufichas.com/matematicas/fracciones/>

# Fracciones



$$\frac{2}{3}$$



—



—



—



—



—



—



—



—



—



—



—

edufichas.com



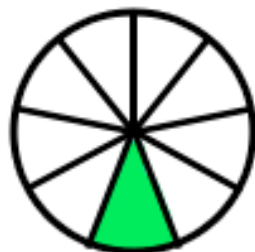
# Fracciones



$\frac{1}{5}$



—



—



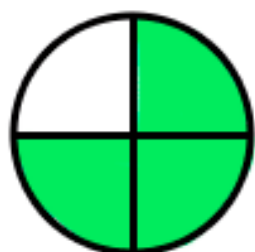
—



—



—



—



—



—



—



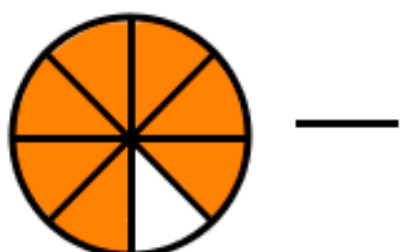

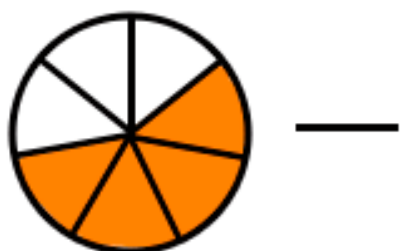
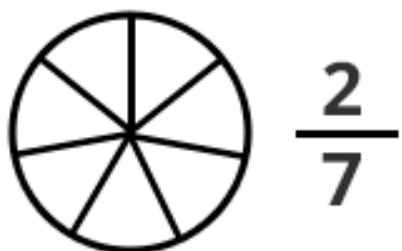
—



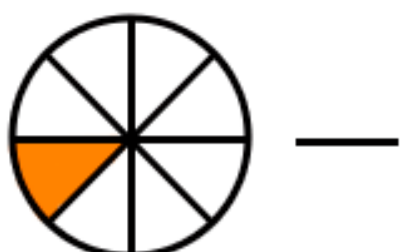
—

edufichas.com


# Fracciones



edufichas.com



# Fracciones



$\frac{6}{9}$



—



—



—



—



—



—



—



—



—



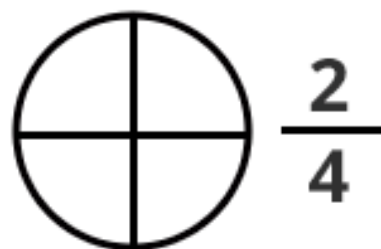
—



—

edufichas.com

# Fracciones equivalentes



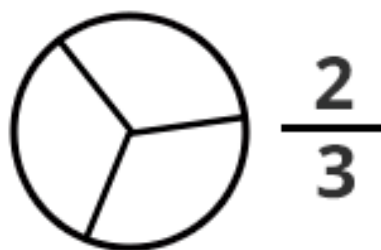
$\frac{1}{3}$



$\frac{4}{6}$



$\frac{4}{12}$



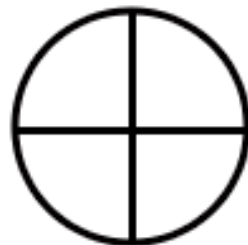
$\frac{1}{2}$



$\frac{2}{10}$

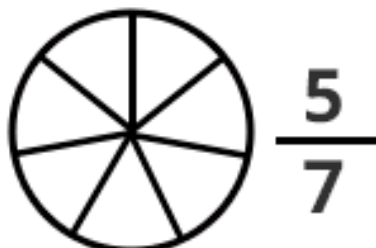
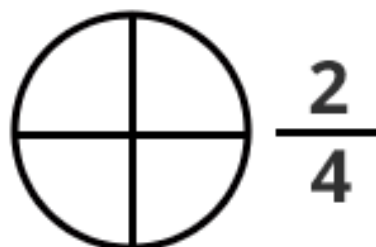
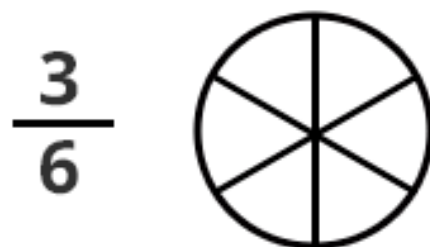
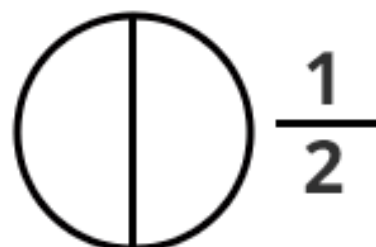


$\frac{2}{4}$



edufichas.com

# Fracciones equivalentes



edufichas.com

## Fracciones equivalentes



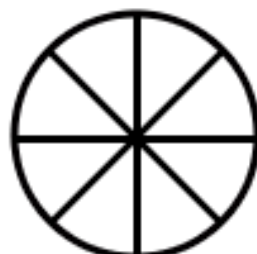
$$\frac{3}{7}$$

$$\frac{12}{15}$$



$$\frac{1}{10}$$

$$\frac{15}{24}$$



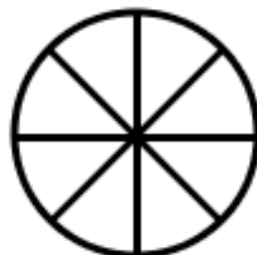
$$\frac{5}{8}$$

$$\frac{6}{14}$$



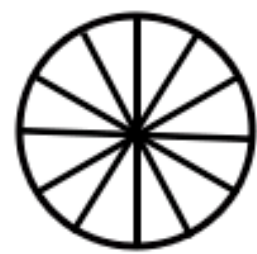
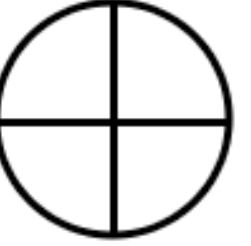
$$\frac{4}{5}$$

$$\frac{2}{20}$$



$$\frac{5}{8}$$

$$\frac{3}{4}$$



$$\frac{9}{12}$$

$$\frac{10}{16}$$





## Fracciones equivalentes



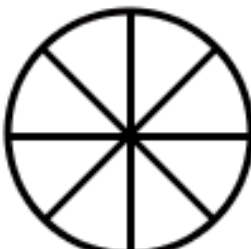
$$\frac{4}{5}$$

$$\frac{2}{14}$$



$$\frac{1}{3}$$

$$\frac{3}{6}$$



$$\frac{4}{8}$$

$$\frac{5}{7}$$



$$\frac{1}{4}$$

$$\frac{8}{10}$$



$$\frac{1}{7}$$

$$\frac{12}{16}$$



$$\frac{10}{14}$$

$$\frac{3}{9}$$



## Fracciones equivalentes



¿Correcto o incorrecto?

$$\frac{1}{2} = \frac{2}{4}$$

$$\frac{3}{5} \times \frac{6}{8}$$

$$\frac{3}{5} \text{ ( ) } \frac{9}{15}$$

$$\frac{5}{6} \text{ ( ) } \frac{25}{30}$$

$$\frac{4}{21} \text{ ( ) } \frac{1}{7}$$

$$\frac{9}{12} \text{ ( ) } \frac{7}{23}$$

$$\frac{2}{7} \text{ ( ) } \frac{8}{28}$$

$$\frac{6}{18} \text{ ( ) } \frac{3}{36}$$

$$\frac{12}{20} \text{ ( ) } \frac{3}{2}$$

$$\frac{4}{7} \text{ ( ) } \frac{10}{70}$$

$$\frac{4}{9} \text{ ( ) } \frac{20}{45}$$

$$\frac{7}{32} \text{ ( ) } \frac{1}{8}$$



## Fracciones equivalentes



¿Correcto o incorrecto?

$$\frac{2}{3} = \frac{6}{9}$$

$$\frac{4}{5} \times \frac{6}{10}$$

$$\frac{1}{2} \bigcirc \frac{9}{18}$$

$$\frac{12}{14} \bigcirc \frac{14}{16}$$

$$\frac{7}{8} \bigcirc \frac{14}{16}$$

$$\frac{2}{6} \bigcirc \frac{1}{3}$$

$$\frac{1}{7} \bigcirc \frac{3}{24}$$

$$\frac{14}{16} \bigcirc \frac{7}{8}$$

$$\frac{8}{9} \bigcirc \frac{4}{6}$$

$$\frac{10}{20} \bigcirc \frac{5}{10}$$

$$\frac{3}{8} \bigcirc \frac{1}{4}$$

$$\frac{21}{35} \bigcirc \frac{3}{5}$$

## Fracciones equivalentes



¿Correcto o incorrecto?

$$\frac{1}{2} = \frac{4}{8}$$

$$\frac{4}{6} \times \frac{1}{9}$$

$$\frac{1}{9} \bigcirc \frac{2}{18}$$

$$\frac{3}{4} \bigcirc \frac{9}{17}$$

$$\frac{3}{7} \bigcirc \frac{1}{4}$$

$$\frac{12}{24} \bigcirc \frac{1}{2}$$

$$\frac{4}{16} \bigcirc \frac{2}{8}$$

$$\frac{6}{8} \bigcirc \frac{3}{5}$$

$$\frac{5}{6} \bigcirc \frac{25}{30}$$

$$\frac{25}{45} \bigcirc \frac{5}{9}$$

$$\frac{4}{7} \bigcirc \frac{2}{6}$$

$$\frac{12}{25} \bigcirc \frac{6}{7}$$

## Fracciones equivalentes



¿Correcto o incorrecto?

$$\frac{6}{3} = \frac{12}{6}$$

$$\frac{6}{4} \times \frac{9}{2}$$

$$\frac{15}{10} \bigcirc \frac{5}{2}$$

$$\frac{3}{8} \bigcirc \frac{6}{16}$$

$$\frac{6}{12} \bigcirc \frac{1}{2}$$

$$\frac{2}{4} \bigcirc \frac{16}{32}$$

$$\frac{8}{16} \bigcirc \frac{1}{2}$$

$$\frac{6}{30} \bigcirc \frac{4}{15}$$

$$\frac{7}{21} \bigcirc \frac{3}{7}$$

$$\frac{35}{42} \bigcirc \frac{7}{6}$$

$$\frac{9}{12} \bigcirc \frac{3}{4}$$

$$\frac{25}{10} \bigcirc \frac{5}{2}$$

Nombre: \_\_\_\_\_ Curso: \_\_\_\_\_ Fecha: \_\_\_\_\_

# Fracciones



$$\frac{1}{4}$$



$$\frac{2}{6}$$



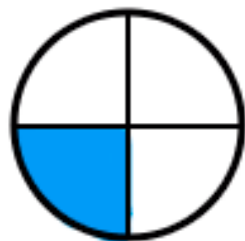
$$\frac{2}{7}$$



$$\frac{4}{5}$$



$$\frac{2}{3}$$



$$\frac{3}{4}$$

edufichas.com

Nombre: \_\_\_\_\_ Curso: \_\_\_\_\_ Fecha: \_\_\_\_\_

# Fracciones



$$\frac{5}{9}$$



$$\frac{2}{6}$$



$$\frac{2}{8}$$



$$\frac{3}{5}$$



$$\frac{4}{10}$$



$$\frac{3}{6}$$

edufichas.com

Nombre: \_\_\_\_\_ Curso: \_\_\_\_\_ Fecha: \_\_\_\_\_

# Fracciones



$$\frac{1}{8}$$



$$\frac{3}{7}$$



$$\frac{1}{7}$$



$$\frac{2}{10}$$



$$\frac{1}{9}$$



$$\frac{3}{9}$$

edufichas.com

Nombre: \_\_\_\_\_ Curso: \_\_\_\_\_ Fecha: \_\_\_\_\_

# Fracciones



$$\frac{4}{6}$$



$$\frac{4}{7}$$



$$\frac{5}{7}$$



$$\frac{4}{8}$$



$$\frac{5}{8}$$



$$\frac{5}{6}$$

edufichas.com

## Sumas con fracciones




$$\frac{5}{9} + \frac{3}{9} =$$



$$\frac{2}{8} + \frac{1}{8} =$$



$$\frac{6}{24} + \frac{8}{24} =$$



edufichas.com

$$\frac{3}{10} + \frac{5}{10} =$$



$$\frac{1}{9} + \frac{1}{9} =$$



$$\frac{1}{9} + \frac{1}{9} =$$





## Sumas con fracciones



$$\frac{6}{12} + \frac{3}{12} =$$



$$\frac{5}{9} + \frac{2}{9} =$$



$$\frac{5}{16} + \frac{9}{16} =$$



edufichas.com

$$\frac{3}{7} + \frac{1}{7} =$$



$$\frac{6}{12} + \frac{4}{12} =$$



$$\frac{12}{14} + \frac{2}{14} =$$



Nombre: \_\_\_\_\_ Curso: \_\_\_\_\_ Fecha: \_\_\_\_\_

## Sumas con fracciones



$$\frac{1}{12} + \frac{9}{12} =$$



$$\frac{10}{14} + \frac{2}{14} =$$



$$\frac{4}{7} + \frac{3}{7} =$$



edufichas.com

$$\frac{8}{16} + \frac{3}{16} =$$



$$\frac{6}{8} + \frac{2}{8} =$$



$$\frac{6}{14} + \frac{3}{14} =$$



## Sumas con fracciones

$$\frac{6}{9} + \frac{1}{9} =$$



$$\frac{3}{12} + \frac{2}{12} =$$



$$\frac{6}{24} + \frac{12}{24} =$$



edufichas.com

$$\frac{4}{16} + \frac{12}{16} =$$



$$\frac{7}{20} + \frac{9}{20} =$$



$$\frac{1}{12} + \frac{2}{12} =$$



## Restas con fracciones



$$\frac{6}{8} - \frac{3}{8} =$$

$$\frac{12}{16} - \frac{10}{16} =$$

$$\frac{5}{12} - \frac{1}{12} =$$

$$\frac{4}{3} - \frac{1}{3} =$$

$$\frac{7}{14} - \frac{3}{14} =$$

$$\frac{14}{18} - \frac{12}{18} =$$

$$\frac{6}{9} - \frac{3}{9} =$$

$$\frac{6}{15} - \frac{3}{15} =$$

$$\frac{7}{10} - \frac{2}{10} =$$

$$\frac{8}{20} - \frac{4}{20} =$$

$$\frac{6}{12} - \frac{4}{12} =$$

$$\frac{3}{7} - \frac{2}{7} =$$



Descarga más fichas y cuadernos de matemáticas para niños aquí:

<https://www.edufichas.com/matematicas/>

Descarga las tablas de multiplicar en este enlace:

<https://www.edufichas.com/tablas-de-multiplicar/>